






INTERVALOS 01 – LOS NOMBRES DE LOS INTERVALOS

Vamos a practicar lo que hemos aprendido en el primer vídeo y poner nombre a unos pocos intervalos. Encontrarás las soluciones en la siguiente página para que puedas comparar con tus respuestas.




Empecemos con los intervalos ascendentes:






Vamos ahora con los intervalos descendentes




Por último vamos con los intervalos armónicos






INTERVALOS 01 – LOS NOMBRES DE LOS INTERVALOS


Compara tus respuestas con las soluciones de los ejercicios



2ª



4ª




7ª



5ª




3ª




6ª


Vamos ahora con los intervalos descendentes



7ª




3ª




2ª



8ª

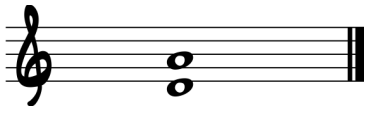


4ª




6ª


Por último vamos con los intervalos armónicos




5ª



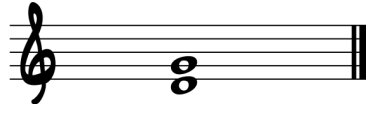
3ª




2ª



6ª



4ª



8ª

